

talent2025 Examination

Std : 5th
Set Code: B

Marks: 160
Duration: 60 Min

General Instructions

Read instruction carefully and strictly follow them:

1. There are Total 40 Multiple Choice Pattern Questions.
2. There is negative marking system for wrong answers.
3. Marking System: +4 for Correct, -1 for Wrong and 0 for Not Attempted
4. Fill the bubbles carefully with ball(blue/black) pen on the OMR sheet.

Q.1. _____ is the famous scientist who discovered gravity.

- a) Sir Issac Newton b) Albert Einstein c) Michael Faraday d) None of the above

Q.2. _____ is used in balloons as it is lighter than air.

- a) Helium b) Oxygen c) Nitrogen d) Argon

Q.3. The most important system in our body is _____.

- a) Skeletal System b) Circulatory System c) Nervous System d) Excretory System

Q.4. Water animal like fish and tadpoles have _____ to breathe.

- a) Tail b) Lungs c) Fins d) Gills

Q.5. The natural home of an animal or plant is called _____.

- a) surrounding b) habitat c) environment d) home

Q.6. _____ is needed for burning.

- a) Oxygen b) Nitrogen c) Hydrogen d) Helium

Q.7. Water is a good _____.

- a) Emulsion b) Solute c) Solution d) Solvent

Q.8. The smallest microorganisms is _____.

- a) bacteria b) virus c) fungi d) protozoa

Q.9. Write in Numerical form.

Thirty Nine Lakhs Thirteen Thousand Eight Hundred and Fourteen.

- a) 3031417 b) 3913814 c) 3831419 d) 3913418

Q.10. In Five digit number $4**42$, a same number is appearing in place of stars and difference in place values is 7200 Find the number?

- a) 8 b) 7 c) 6 d) 5

Q.11. Write the following numbers in ascending order & find the difference between the numbers second from left and second from right ? 446 , 489, 365, 496, 314

- a) 142 b) 124 c) 114 d) 134

Q.12. Write 56 in roman number?

- a) LVI b) LIV c) CVI d) CIV

Q.13. From the given decimal number 92.347. which is the digit at tenths place.

- a) 2 b) 3 c) 4 d) 9

Q.14. 50 cm = _____ mm

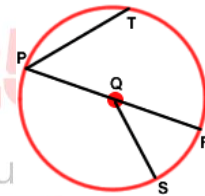
- a) 5 mm b) 500 mm c) 5,000 mm d) 50,000 mm

Q.15. How many Edges does a Cuboid have.

- a) 4 b) 8 c) 12 d) 16

Q.16. Which of the following segment in the figure is not a radius?

- a) PQ b) QR
c) QS d) PR



Q.17. Complete the Axioms by selecting the correct option.

Where there is a will , _____.

- a) There is a problem b) There is a rule c) There is a adventure d) There is a way

Q.18. Ruchira wants to go for her School Picnic. Choose the Correct alternative for seeking permission ?

- a) I must go for picnic. b) I am not going for picnic.
c) May I go for picnic. d) Can't I go for picnic ?

Q.19. Rearrange the following words and make a meaningful word - e v t l e s n i o i :

- a) telinovies b) television c) telivesino d) tvisieleon

Q.20. Fill in the blank with correct option.

The _____ was singing a song.

- a) Saint b) Scent c) Cent d) Sent

Q.21 The following words are related to Crime. Find the odd one out:

- a) Robbery b) Criminal c) Royal d) Punishment.

Q.22. Identify the word which is not a Verb from the given options :

- a) Eat b) Play c) Kind d) Drink

Q.23. Choose the correct Contracted form:-

The Children _____ going to school.

- a) won't b) isn't c) aren't d) shouldn't

Q.24. Fill in the blanks with a suitable Pronoun:

No one trust _____ .

- a) she b) him c) his d) he

Q.25. REDGAN - Arrange the letters to make a meaningful word and state which of the following it belongs to .

- a) Fear b) Fact c) Red d) Sad

Q.26. Write the word 'DISCIPLES' in the reverse order and find it's middle letter



- a) S b) P c) C d) I

Q.27. Given below are certain words. How many times has the letter 'C' come after letter 'I'?

Juice , biscuit , rice, slice.

- a) 2 b) 4 c) 1 d) 3

Q.28. In each of the following, figures move in a particular sequence. Identify the Sequence and find the figure in place of the question mark from the alternatives given.



- a) b) c) d)

Q.29 In the following questions, the first pair has same relation in it. The same relation holds time for the second pair . Identify the relation and select the correct option to replace the question mark.

Rain : Patter :: Coins : ?

- a) Roar b) Rustle c) Jingle d) Grunt

Q.30. Choose or find the odd word in the given groups

Sun , Moon , Star , Mars , Universe

- a) Sun b) Moon c) Mars d) Universe

